



1) Carré de 12 cm et 20 cm de périmètre

3 cm



$$3 \times 4 = 12 \text{ cm}$$

5 cm



$$4 \times 5 = 20 \text{ cm}$$


2) Un rectangle de 18 cm de périmètre

8 cm




1 cm

4 cm




2 cm

6 cm



3 cm

5 cm



4 cm

3) Un rectangle de 24 cm de périmètre

11 cm




1 cm

10 cm



2 cm

9 cm




3 cm

8 cm



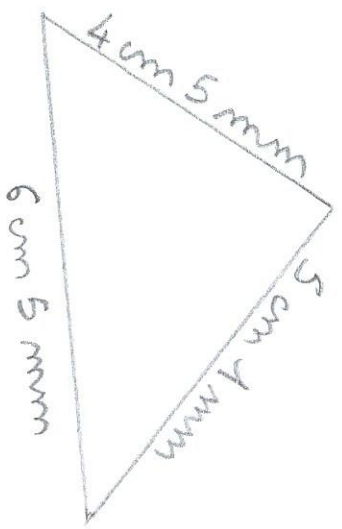
4 cm

7 cm

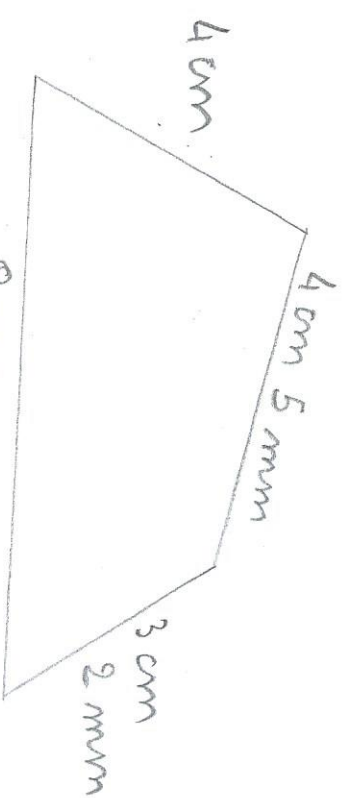


5 cm

4) Exemples



périmètre: 16 cm 1 mm



périmètre: 19 cm 7 mm